




## Geography: the world

**1 a** Look at the map. Match the words with the photos.

desert mountain river ocean



**b** On the map find the names of:

- a desert
- the four oceans
- four rivers
- three mountain ranges

**2 a** Look at the map. Change the underlined words.

- 1 The Indian Ocean is between Europe and Oceania.  
*The Indian Ocean is between Africa and Oceania.*
- 2 North America and South America are between the Pacific Ocean and the Arctic Ocean.
- 3 Europe is between the Atlantic Ocean and the Indian Ocean.
- 4 The Arctic Ocean is next to North America, Antarctica and Asia.
- 5 Oceania is between the Indian Ocean and the Arctic Ocean.
- 6 The letter a is in Africa, Antarctica, America, and Europe.

**b** 1.56 Listen and check.

**3 a** 1.57 Listen. Point to the places you hear.

**b** 1.57 Listen again and repeat.

**4** Look at the map. Answer the questions.

- 1 Where's the Nile River?  
*It's in Africa.*
- 2 Where are the Himalayas?
- 3 Where's the Sahara Desert?
- 4 Where are the Rocky Mountains?
- 5 Where's the Amazon River?
- 6 Which ocean is next to four continents?
- 7 Which continent is cold?
- 8 Which continent is your country in?

